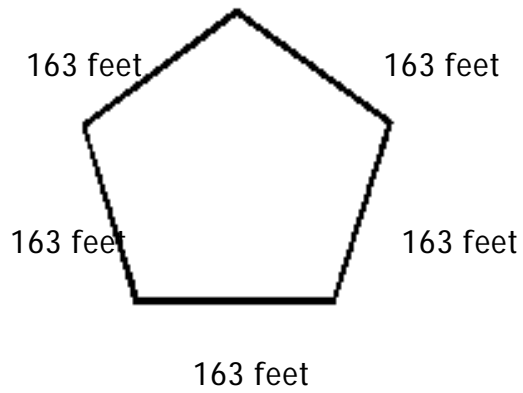


Perimeter 2---Whole Numbers

MULTIPLE CHOICE. Choose the one alternative that best completes the statement or answers the question.

Find the perimeter.

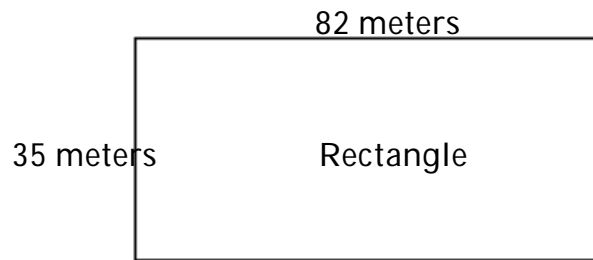
1)



- A) 830 ft B) 26,569 ft C) 978 ft D) 815 ft

1) _____

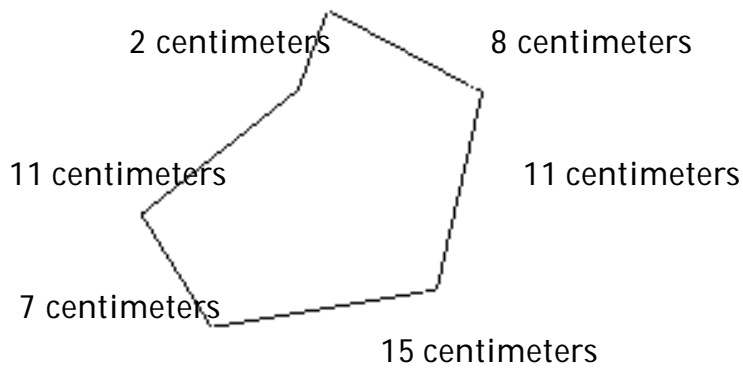
2)



- A) 199 m B) 2870 m C) 234 m D) 117 m

2) _____

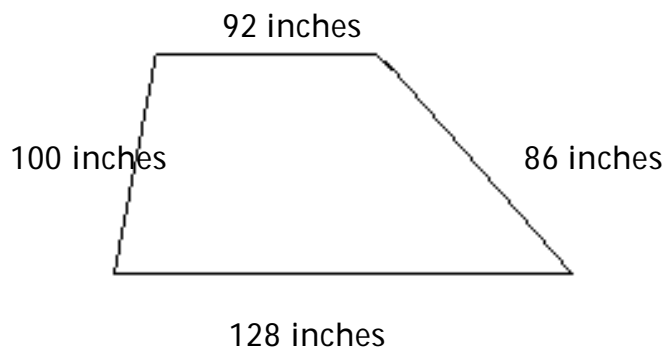
3)



- A) 43 cm B) 50 cm C) 61 cm D) 54 cm

3) _____

4)

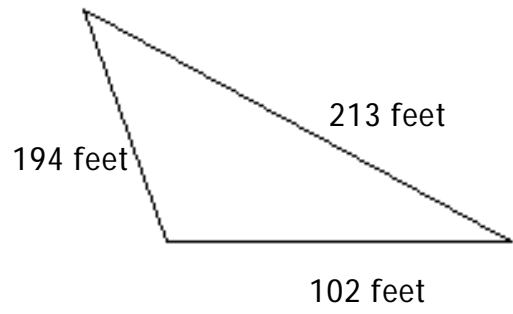


- A) 314 in. B) 356 in. C) 406 in. D) 372 in.

4) _____

Perimeter 2---Whole Numbers

5)



A) 22,133 ft

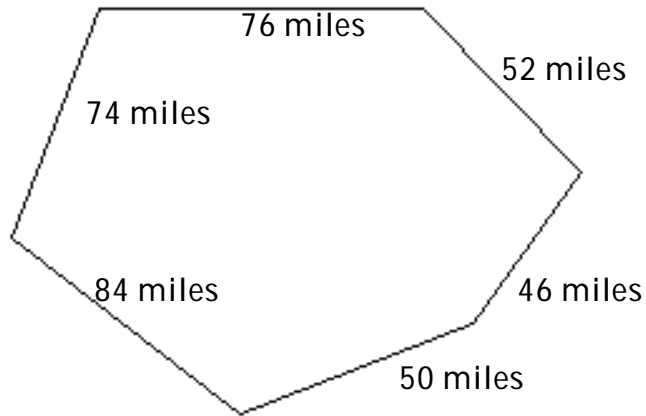
B) 499 ft

C) 407 ft

D) 509 ft

5) _____

6)



A) 308 mi

B) 382 mi

C) 402 mi

D) 458 mi

6) _____

Answer Key

Testname: 1.4 PERIMETER 2

- 1) D
- 2) C
- 3) D
- 4) C
- 5) D
- 6) B