

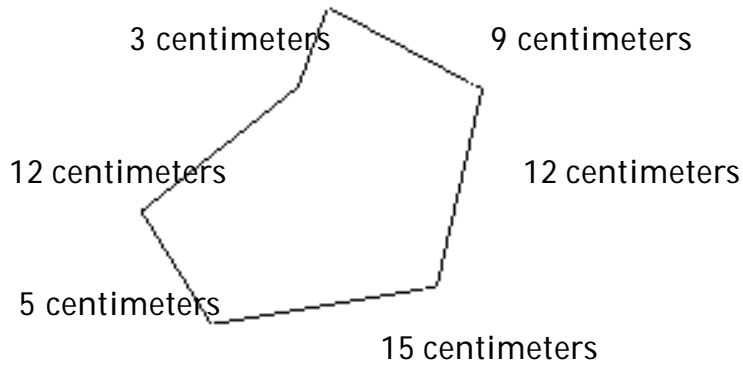
Perimeter 3---Whole Numbers

MULTIPLE CHOICE. Choose the one alternative that best completes the statement or answers the question.

Find the perimeter.

1)

1) \_\_\_\_\_



A) 44 cm

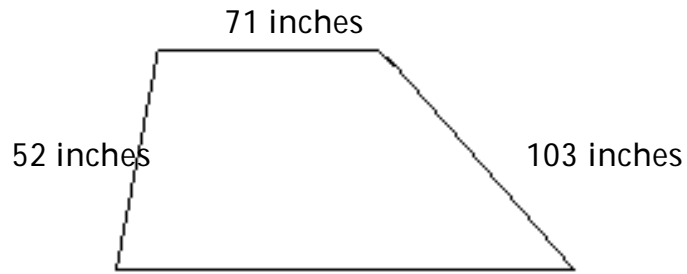
B) 50 cm

C) 61 cm

D) 56 cm

2)

2) \_\_\_\_\_



A) 297 in.

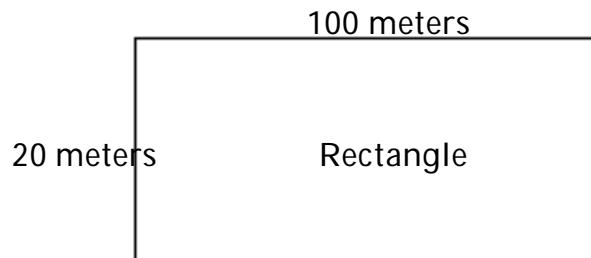
B) 348 in.

C) 368 in.

D) 310 in.

3)

3) \_\_\_\_\_



A) 220 m

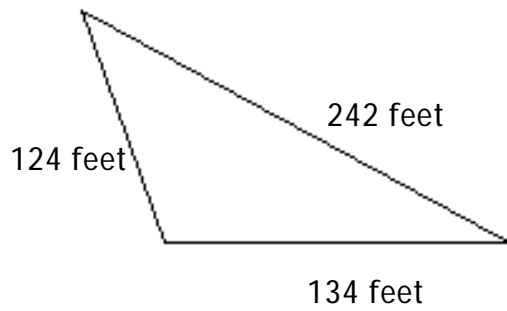
B) 2000 m

C) 240 m

D) 120 m

4)

4) \_\_\_\_\_



A) 32,794 ft

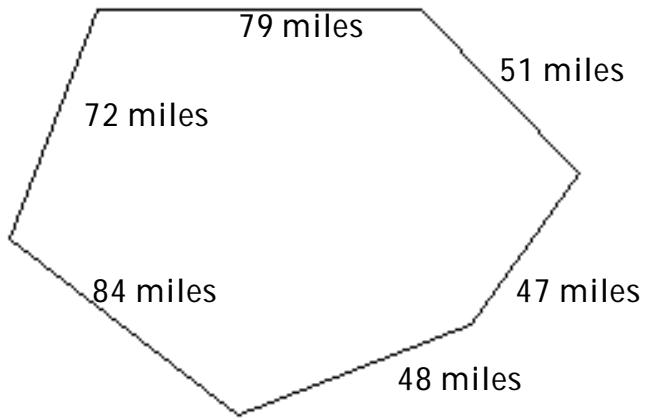
B) 490 ft

C) 366 ft

D) 500 ft

Perimeter 3---Whole Numbers

5)



A) 309 mi

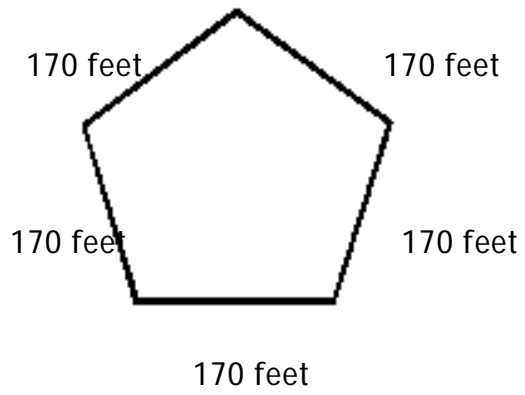
B) 381 mi

C) 401 mi

D) 460 mi

5) \_\_\_\_\_

6)



A) 865 ft

B) 28,900 ft

C) 1020 ft

D) 850 ft

6) \_\_\_\_\_

Answer Key

Testname: 1.4 PERIMETER 3

- 1) D
- 2) C
- 3) C
- 4) D
- 5) B
- 6) D