

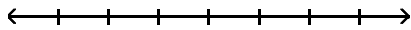
Graph Integers on a Number Line - 1

MULTIPLE CHOICE. Choose the one alternative that best completes the statement or answers the question.

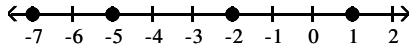
Graph the numbers on the number line.

1) $-6, -4, -2, 0$

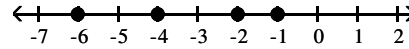
1) _____



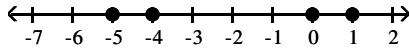
A)



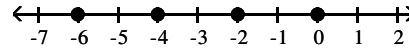
B)



C)

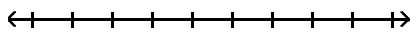


D)

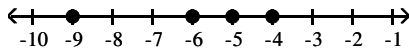


2) $-9, -7, -5, -3$

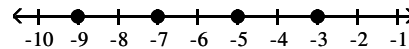
2) _____



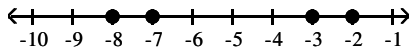
A)



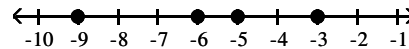
B)



C)

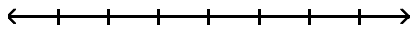


D)

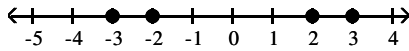


3) $-4, -2, 0, 2$

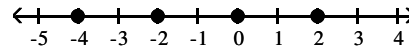
3) _____



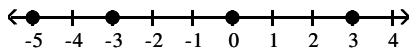
A)



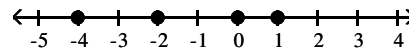
B)



C)

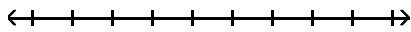


D)

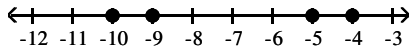


4) $-11, -9, -7, -5$

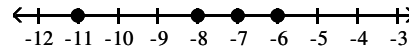
4) _____



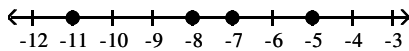
A)



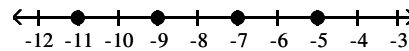
B)



C)



D)



Answer Key

Testname: UNTITLED1

- 1) D
- 2) B
- 3) B
- 4) D