

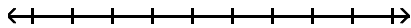
Graph Integers on a Number Line - 2

MULTIPLE CHOICE. Choose the one alternative that best completes the statement or answers the question.

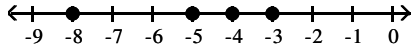
Graph the numbers on the number line.

1) $-8, -6, -4, -2$

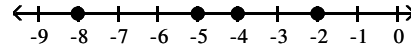
1) _____



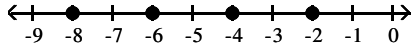
A)



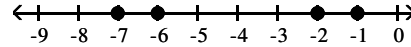
B)



C)

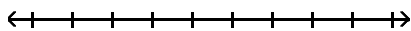


D)

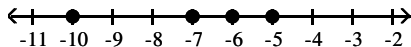


2) $-10, -8, -6, -4$

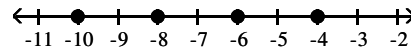
2) _____



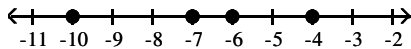
A)



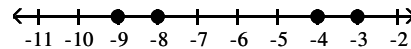
B)



C)

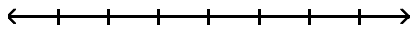


D)

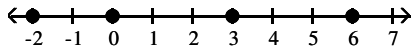


3) $-1, 1, 3, 5$

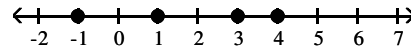
3) _____



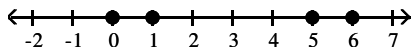
A)



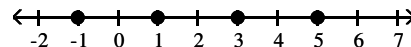
B)



C)

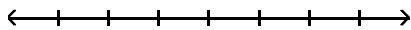


D)

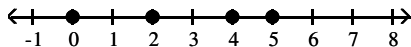


4) $0, 2, 4, 6$

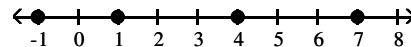
4) _____



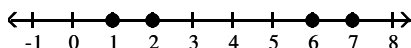
A)



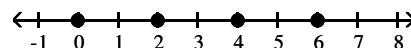
B)



C)



D)



Answer Key

Testname: UNTITLED1

- 1) C
- 2) B
- 3) D
- 4) D