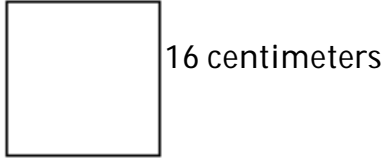


MULTIPLE CHOICE. Choose the one alternative that best completes the statement or answers the question.

Find the area of the square.

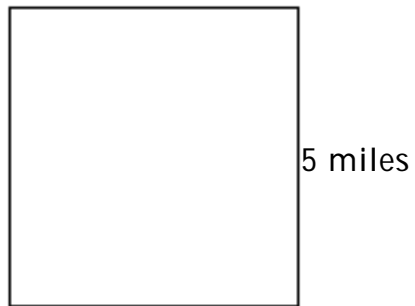
1)



- A) 251 sq cm B) 512 sq cm C) 256 sq cm D) 64 sq cm

1) _____

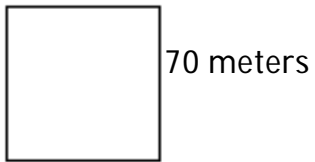
2)



- A) 20 sq mi B) 25 sq mi C) 28 sq mi D) 21 sq mi

2) _____

3)



- A) 4900 sq m B) 280 sq m C) 9800 sq m D) 140 sq m

3) _____

Answer Key
Testname: 1

- 1) C
- 2) B
- 3) A