

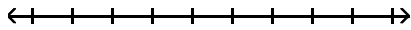
Graph Integers on a Number Line - 3

MULTIPLE CHOICE. Choose the one alternative that best completes the statement or answers the question.

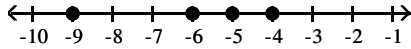
Graph the numbers on the number line.

1) $-9, -7, -5, -3$

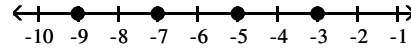
1) _____



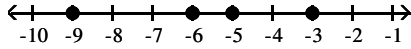
A)



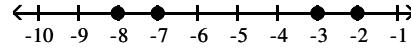
B)



C)

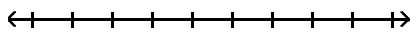


D)

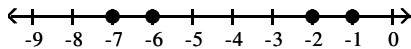


2) $-8, -6, -4, -2$

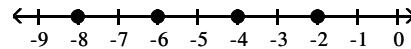
2) _____



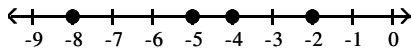
A)



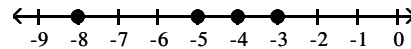
B)



C)

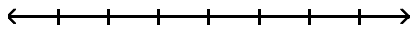


D)

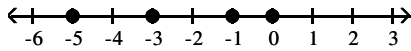


3) $-5, -3, -1, 1$

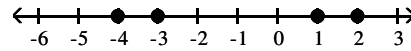
3) _____



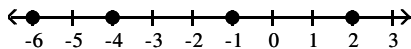
A)



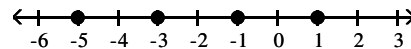
B)



C)

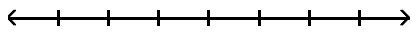


D)

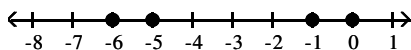


4) $-7, -5, -3, -1$

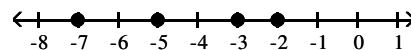
4) _____



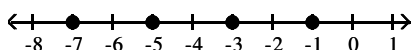
A)



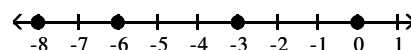
B)



C)



D)



Answer Key

Testname: UNTITLED1

- 1) B
- 2) B
- 3) D
- 4) C