

Student: _____
Date: _____
Time: _____

Instructor: Kim Ziegler
Course: ZIEGLER CRN 26885 MAT
0022C DEVELOPMENTAL MATH
COMBINED 201520
Book: Jordan: Integrated Arithmetic &
Basic Algebra, 5e

Assignment: MAT 0022 Final Exam
Practice

1. Simplify by combining like terms.

$$-9 + 7m + 14 - 9m$$

- A. $-2m + 5$
 B. $-3m + 4$
 C. $-m + 5$
 D. $-m - 5$

Answer: A

2. Evaluate the following for $x = -4$, $y = 5$, and $z = -5$.

$$\frac{x^2 - y^2}{y^2 + z^2}$$

For $x = -4$, $y = 5$, and $z = -5$, $\frac{x^2 - y^2}{y^2 + z^2} = \square$.

(Type an integer or a simplified fraction.)

Answer: $-\frac{9}{50}$

3. Find the GCF.

$$64a^8b^3, 40a^6b^8$$

- A. $8a^8b^8$
 B. $4a^2b^5$
 C. $320a^8b^8$
 D. $8a^6b^3$

Answer: D

Student: _____
Date: _____
Time: _____

Instructor: Kim Ziegler
Course: ZIEGLER CRN 26885 MAT
0022C DEVELOPMENTAL MATH
COMBINED 201520
Book: Jordan: Integrated Arithmetic &
Basic Algebra, 5e

Assignment: MAT 0022 Final Exam
Practice

4. Solve the quadratic equation.

$$3x^2 - 5x - 2 = 0$$

The solution is $x = \square$.

(Use a comma to separate answers as needed.)

Answer: $-\frac{1}{3}, 2$

5. Solve.

$$8 - 4x = -7x + 2$$

$x = \square$

Answer: -2

Student: _____
Date: _____
Time: _____

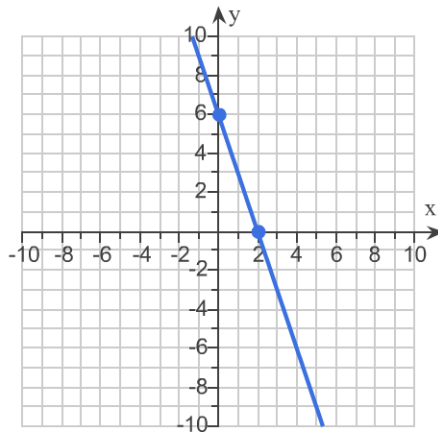
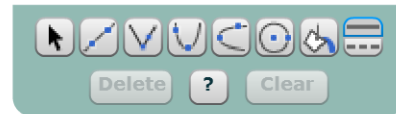
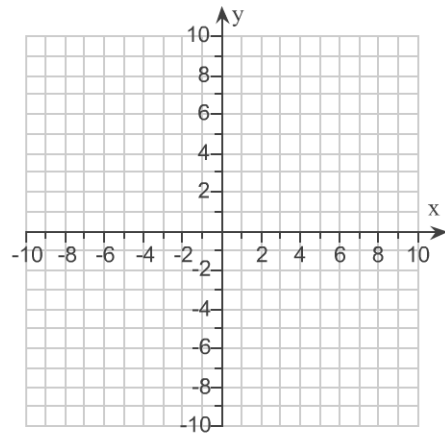
Instructor: Kim Ziegler
Course: ZIEGLER CRN 26885 MAT
0022C DEVELOPMENTAL MATH
COMBINED 201520
Book: Jordan: Integrated Arithmetic &
Basic Algebra, 5e

Assignment: MAT 0022 Final Exam
Practice

6. Use the intercepts to graph the equation.

$$3x + y = 6$$

Use the graphing tool to graph the line. Use the intercepts when drawing the line. If only one intercept exists, use it and another point to draw the line.



Answer:

7. Solve for the missing variable in the formula.

$$d = rt \text{ (distance formula); } d = 145, t = 29$$

$$r = \square$$

Answer: 5

Student: _____
Date: _____
Time: _____

Instructor: Kim Ziegler
Course: ZIEGLER CRN 26885 MAT
0022C DEVELOPMENTAL MATH
COMBINED 201520
Book: Jordan: Integrated Arithmetic &
Basic Algebra, 5e

Assignment: MAT 0022 Final Exam
Practice

8. Solve the equation.

$$0.2(v + 0.6) = 0.4(v - 4.2)$$

The solution is $v = \square$. (Type an integer or a decimal.)

Answer: 9

9. Simplify the expression.

$$(11^6)^5$$

$$(11^6)^5 = \square$$

(Simplify your answer. Type exponential notation using positive exponents.)

Answer: 11^{30}

10. Solve the equation.

$$1.7(y + 6) - (6.7 + 0.7y) = -3 + 2$$

The solution is $y = \square$.

(Simplify your answer. Type an integer or a decimal.)

Answer: -4.5

11. Simplify and write with positive exponents.

$$\frac{x^{-6}}{x^{10}}$$

$$\frac{x^{-6}}{x^{10}} = \square \text{ (Use positive exponents only. Simplify your answer.)}$$

Answer: $\frac{1}{x^{16}}$

12. Solve the equation.

$$n^2 - 3n - 28 = 0$$

$$n = \square$$

(Use a comma to separate answers as needed.)

Answer: -4,7

Student: _____
Date: _____
Time: _____

Instructor: Kim Ziegler
Course: ZIEGLER CRN 26885 MAT
0022C DEVELOPMENTAL MATH
COMBINED 201520
Book: Jordan: Integrated Arithmetic &
Basic Algebra, 5e

Assignment: MAT 0022 Final Exam
Practice

13. Divide the polynomial by the monomial.

$$\frac{6m^3 + 8m}{2m^2}$$

Answer: $3m + \frac{4}{m}$

$$\frac{6m^3 + 8m}{2m^2} = \square$$

(Simplify your answer. Use positive exponents only.)

14. Find the slope of the line through the pair of points.

$(-2, -7)$ and $(6, 7)$

A. $\frac{7}{4}$

B. $\frac{4}{7}$

C. $-\frac{7}{4}$

D. $-\frac{4}{7}$

Answer: A

15. Find the product.

$$6xy^5(3xy^2 - 5xy + 5x)$$

$$6xy^5(3xy^2 - 5xy + 5x) = \square$$

(Simplify your answer.)

Answer: $18x^2y^7 - 30x^2y^6 + 30x^2y^5$

Student: _____
Date: _____
Time: _____

Instructor: Kim Ziegler
Course: ZIEGLER CRN 26885 MAT
0022C DEVELOPMENTAL MATH
COMBINED 201520
Book: Jordan: Integrated Arithmetic &
Basic Algebra, 5e

Assignment: MAT 0022 Final Exam
Practice

16. Find the slope of the line containing the pair of points.

$(8, -5)$ and $(7, -12)$

Select the correct choice below and, if necessary, fill in the answer box to complete your choice.

- A. The slope of the line is . (Simplify your answer. Type an integer or a fraction.)
 B. The slope is undefined.

Answer: A, 7

17. How much will it cost to carpet a rectangular room measuring 9 m by 23 m, if carpeting costs \$28.25 per square meter?

- A. \$1,808.00
 B. \$11,695.50
 C. \$904.00
 D. \$5,847.75

Answer: D

18. Solve the equation.

$$9x - 3x = -48$$

$$x = \text{$$

(Simplify your answer. Type an integer or a decimal.)

Answer: -8

19. Subtract. Write the resulting polynomial in descending order of degree.

$$(10p^2 + 11p + 4) - (5p^2 + 16p - 8)$$

- A. $5p^2 - 5p - 4$
 B. $5p^4 - 5p^2 + 12$
 C. $5p^2 - 5p + 12$
 D. $5p^2 + 5p - 12$

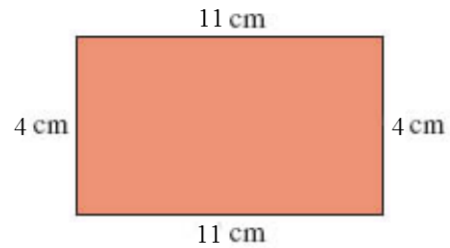
Answer: C

Student: _____
Date: _____
Time: _____

Instructor: Kim Ziegler
Course: ZIEGLER CRN 26885 MAT
0022C DEVELOPMENTAL MATH
COMBINED 201520
Book: Jordan: Integrated Arithmetic &
Basic Algebra, 5e

Assignment: MAT 0022 Final Exam
Practice

20. Find the perimeter of the polygon.



The perimeter of the polygon is cm.

Answer: 30

21. Find the product.

$$(3x + 11)(3x - 11)$$

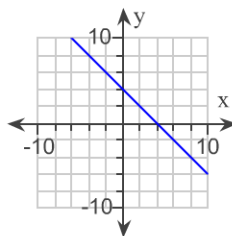
- A. $3x^2 - 66x - 121$
 B. $9x^2 - 121$
 C. $9x^2 + 66x - 121$
 D. $9x^2 - 66x - 121$

Answer: B

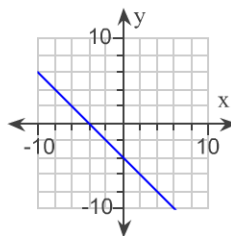
22. Complete the ordered pairs. Then graph the equation by plotting the points and drawing a line through them.

$$y + 4 = x \quad (0, \quad), (\quad, 0), (5, \quad)$$

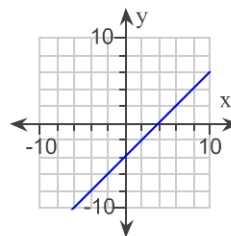
- A. $(0, 4), (4, 0), (5, -1)$



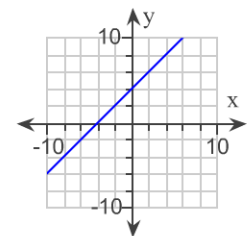
- B. $(0, -4), (-4, 0), (5, -9)$



- C. $(0, -4), (4, 0), (5, 1)$



- D. $(0, 4), (-4, 0), (5, 9)$



Answer: C

Student: _____
Date: _____
Time: _____

Instructor: Kim Ziegler
Course: ZIEGLER CRN 26885 MAT
0022C DEVELOPMENTAL MATH
COMBINED 201520
Book: Jordan: Integrated Arithmetic &
Basic Algebra, 5e

Assignment: MAT 0022 Final Exam
Practice

23. Factor the binomial. If the binomial is not factorable, choose "prime."

$$r^2 - 16s^2$$

- A. $(r - 4s)(r + 4s)$
 B. $(r^2 - 4s)(r^2 + 4s)$
 C. $(r - 4s)(r - 4s)$
 D. prime

Answer: A

24. Factor completely.

$$6v^2 - 11v - 35$$

Select the correct choice below and fill in any answer boxes within your choice.

- A. The answer is .
 B. The expression is prime.

Answer: A, $(2v - 7)(3v + 5)$

25. Divide and simplify.

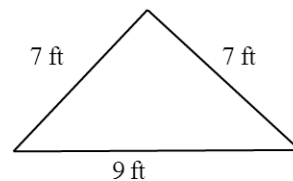
$$\frac{p^3}{p^{-1}}$$

$$\frac{p^3}{p^{-1}} = \square$$

(Simplify your answer. Type exponential notation using positive exponents.)

Answer: p^4

26. Find the perimeter of the triangle.



Perimeter = ft

Answer: 23

Student: _____
Date: _____
Time: _____

Instructor: Kim Ziegler
Course: ZIEGLER CRN 26885 MAT
0022C DEVELOPMENTAL MATH
COMBINED 201520
Book: Jordan: Integrated Arithmetic &
Basic Algebra, 5e

Assignment: MAT 0022 Final Exam
Practice

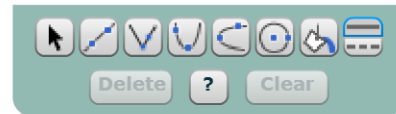
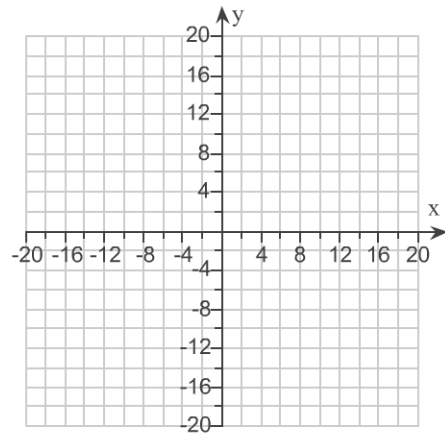
27. Graph using the slope and the y-intercept.

$$2x + y = 6$$

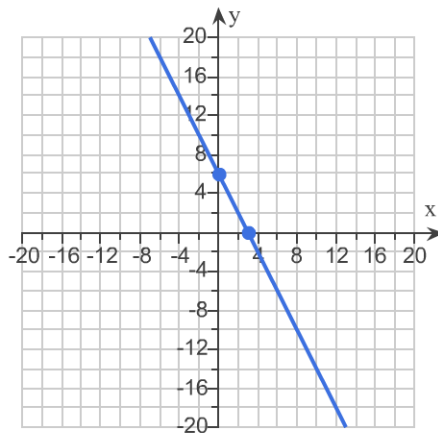
The slope is $m = \square$.

(Type an integer or a fraction.)

Use the graphing tool to graph the line. Use the slope and y-intercept when drawing the line.



Answers - 2



Student: _____
Date: _____
Time: _____

Instructor: Kim Ziegler
Course: ZIEGLER CRN 26885 MAT
0022C DEVELOPMENTAL MATH
COMBINED 201520
Book: Jordan: Integrated Arithmetic &
Basic Algebra, 5e

Assignment: MAT 0022 Final Exam
Practice

28. Solve the equation.

$$\frac{2}{3}x - 1 = \frac{7}{9}x$$

Select the correct choice below and fill in any answer boxes in your choice.

A. The solution set is $\{\square\}$. (Simplify your answer.)

B. There is no solution.

Answer: A, -9

29. Simplify the expression.

$$\frac{(x^{-5})^4}{x^3x^2}$$

$$\frac{(x^{-5})^4}{x^3x^2} = \square$$

(Simplify your answer. Use integers or fractions for any numbers in the expression. Use positive exponents only.)

Answer: $\frac{1}{x^{25}}$

30. Solve.

$$1.6y - 1.9 - 0.3y = 4.6$$

The solution is $y = \square$. (Type an integer or a decimal.)

Answer: 5

Student: _____
Date: _____
Time: _____

Instructor: Kim Ziegler
Course: ZIEGLER CRN 26885 MAT
0022C DEVELOPMENTAL MATH
COMBINED 201520
Book: Jordan: Integrated Arithmetic &
Basic Algebra, 5e

Assignment: MAT 0022 Final Exam
Practice

31. Factor by grouping.

$$uv - 6u + 5v - 30$$

- A. $(v + 6)(u - 5)$
 B. $(v - 6)(u + 5)$
 C. $(v - 6)(u - 5)$
 D. $5u(v - 6)$

Answer: B

32. Of the 8760 hours in a year, one television was on for 438 hours. What percent is this?

The percent is %

(Type a whole number or a decimal.)

Answer: 5

33. Translate the mathematical sentence into English.

$$6(7 - x) = 44$$

Three correct translations are shown. Which translation is NOT correct?

- A. The product of six and the difference between seven and some number is forty-four.
 B. Six times the difference between some number and seven is forty-four.
 C. The difference of seven and some number is multiplied by six and the result is forty-four.
 D. Subtract some number from seven and multiply the difference by six. That product is equal to forty-four.

Answer: B

34. Solve the equation.

$$-8 = 3x - 5$$

The solution is $x =$.

Answer: -1

Student: _____
Date: _____
Time: _____

Instructor: Kim Ziegler
Course: ZIEGLER CRN 26885 MAT
0022C DEVELOPMENTAL MATH
COMBINED 201520
Book: Jordan: Integrated Arithmetic &
Basic Algebra, 5e

Assignment: MAT 0022 Final Exam
Practice

35. Find the slope of the line that goes through the given points.

(6,5) and (8,4)

Select the correct choice below and, if necessary, fill in the answer box to complete your choice.

A. The slope is $m = \square$. (Simplify your answer. Type an integer or a fraction.)

B. The slope is undefined.

Answer: A, $-\frac{1}{2}$

36. Factor completely.

$$8x^2y^2 + 16xy^2 + 6y^2$$

Select the correct choice below and, if necessary, fill in the answer box within your choice.

A. $8x^2y^2 + 16xy^2 + 6y^2 = \square$

B. The polynomial is prime.

Answer: A, $2y^2(2x + 3)(2x + 1)$

37. Solve for h.

$$h = \square$$

$$B = hp$$

Answer: $\frac{B}{p}$

Student: _____
Date: _____
Time: _____

Instructor: Kim Ziegler
Course: ZIEGLER CRN 26885 MAT
0022C DEVELOPMENTAL MATH
COMBINED 201520
Book: Jordan: Integrated Arithmetic &
Basic Algebra, 5e

Assignment: MAT 0022 Final Exam
Practice

38. Factor the expression completely. If the polynomial is not factorable, choose "prime."

$$t^2 - 14t + 48$$

- A. $(t - 24)(t - 2)$
 B. $(t + 6)(t + 8)$
 C. $(t - 6)(t - 8)$
 D. prime

Answer: C

39. Solve for the missing number.

$$\frac{-11}{n} = \frac{8}{56}$$

The solution is $n = \square$.

Answer: -77

Student: _____
Date: _____
Time: _____

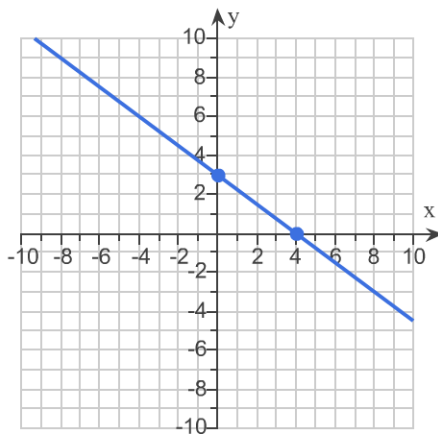
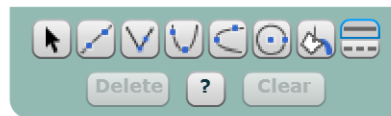
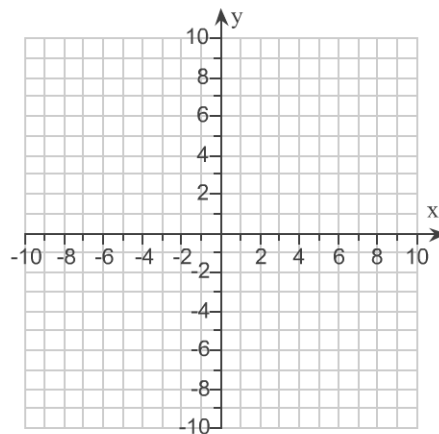
Instructor: Kim Ziegler
Course: ZIEGLER CRN 26885 MAT
0022C DEVELOPMENTAL MATH
COMBINED 201520
Book: Jordan: Integrated Arithmetic &
Basic Algebra, 5e

Assignment: MAT 0022 Final Exam
Practice

40. Find the intercepts and then use them to graph the equation.

$$3x + 4y = 12$$

Use the graphing tool to graph the line. Use the intercepts when drawing the line. If only one intercept exists, use it and another point to draw the line.



Answer:

Student: _____
Date: _____
Time: _____

Instructor: Kim Ziegler
Course: ZIEGLER CRN 26885 MAT
0022C DEVELOPMENTAL MATH
COMBINED 201520
Book: Jordan: Integrated Arithmetic &
Basic Algebra, 5e

Assignment: MAT 0022 Final Exam
Practice

41. Find the perimeter of the square.

Each side is 62 feet.

The perimeter is

Answers 248
ft.

42. Solve the equation.

$$-3x - 5 = 19$$

x =

Answer: -8

43. Simplify using the laws of exponents.

$$(-5x^3y^4)(-3x^2y^2)$$

- A. $15xy^6$
 B. $15x^5y^6$
 C. $15xy^5$
 D. $15x^6y^5$

Answer: B

44. Solve and check the following equation.

$$9(y - 1) = 4y + 21$$

y =

Answer: 6

Student: _____
Date: _____
Time: _____

Instructor: Kim Ziegler
Course: ZIEGLER CRN 26885 MAT
0022C DEVELOPMENTAL MATH
COMBINED 201520
Book: Jordan: Integrated Arithmetic &
Basic Algebra, 5e

Assignment: MAT 0022 Final Exam
Practice

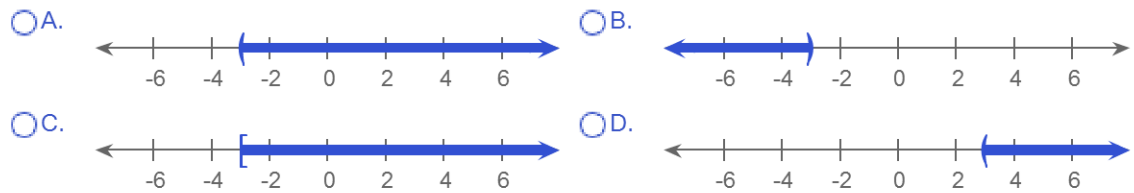
45. Solve the inequality. Express the solution set in interval notation and graph it.

$$7 - 5x < 22$$

Which is the correct interval notation for the solution set?

- A. $[-3, \infty)$
 B. $(-\infty, -3)$
 C. $(-3, \infty)$
 D. $(3, \infty)$

Which of the four graphs below is the graph of the solution set?



Answers C
A

46. Multiply.

$$2c^4d^3(9c^4d^5 - 2c^3d)$$

$$2c^4d^3(9c^4d^5 - 2c^3d) = \square$$

(Simplify your answer.)

$$\text{Answer: } 18c^8d^8 - 4c^7d^4$$

Student: _____
Date: _____
Time: _____

Instructor: Kim Ziegler
Course: ZIEGLER CRN 26885 MAT
0022C DEVELOPMENTAL MATH
COMBINED 201520
Book: Jordan: Integrated Arithmetic &
Basic Algebra, 5e

Assignment: MAT 0022 Final Exam
Practice

47. Determine whether the following is an identity or a contradiction and indicate the solutions.

$$5x + 17 = 5(x + 3) + 2$$

Choose the correct answer below.

- A. The equation is a contradiction. All real numbers are solutions.
- B. The equation is an identity. All real numbers are solutions.
- C. The equation is an identity. There are no solutions.
- D. The equation is a contradiction. There are no solutions.

Answer: B

48. Solve for h.

$$a = hm$$

Answer: $\frac{a}{m}$

The solution is $h = \square$.

49. Factor the trinomial.

$$w^2 + 4w + 77$$

Select the correct choice below and fill in any answer boxes within your choice.

- A. The answer is \square .
- B. The polynomial is prime.

Answer: B

Student: _____
Date: _____
Time: _____

Instructor: Kim Ziegler
Course: ZIEGLER CRN 26885 MAT
0022C DEVELOPMENTAL MATH
COMBINED 201520
Book: Jordan: Integrated Arithmetic &
Basic Algebra, 5e

Assignment: MAT 0022 Final Exam
Practice

50. Determine whether the following is an identity or a contradiction and indicate the solutions.

$$4x + 8 = 4(x + 1) + 4$$

Choose the correct answer below.

- A. The equation is an identity. All real numbers are solutions.
- B. The equation is a contradiction. There are no solutions.
- C. The equation is an identity. There are no solutions.
- D. The equation is a contradiction. All real numbers are solutions.

Answer: A

51. Factor.

$$w^2 + 10w + 25$$

Select the correct choice below and fill in any answer boxes within your choice.

- A. $w^2 + 10w + 25 = \square$
- B. The expression is prime.

Answer: A, $(w + 5)^2$

52. Solve.

$$4x + 8 = 16$$

$$x = \square$$

Answer: 2

53. Emily earns \$460 per week and has 24% of this amount withheld for taxes, Social Security, and Medicare. Find the amount withheld.

The amount withheld is \$ \square .

(Type a whole number or a decimal.)

Answer: 110.40

Student: _____
Date: _____
Time: _____

Instructor: Kim Ziegler
Course: ZIEGLER CRN 26885 MAT
0022C DEVELOPMENTAL MATH
COMBINED 201520
Book: Jordan: Integrated Arithmetic &
Basic Algebra, 5e

Assignment: MAT 0022 Final Exam
Practice

54. Simplify the expression. Assume that variables represent nonnegative numbers.

$$\sqrt{75a^3b^2}$$

- A. $5ab\sqrt{3a}$
 B. $3a^2\sqrt{5b}$
 C. $15ab$
 D. $8ab\sqrt{3a}$

Answer: A

55. Simplify. Express answers with positive exponents only.

$$(x^2y^{-5})^6$$

- A. $\frac{x^8}{y^{11}}$
 B. $x^{12}y^{30}$
 C. $-x^8y^{11}$
 D. $\frac{x^{12}}{y^{30}}$

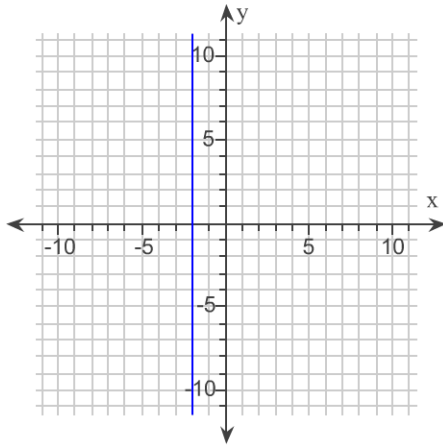
Answer: D

Student: _____
Date: _____
Time: _____

Instructor: Kim Ziegler
Course: ZIEGLER CRN 26885 MAT
0022C DEVELOPMENTAL MATH
COMBINED 201520
Book: Jordan: Integrated Arithmetic &
Basic Algebra, 5e

Assignment: MAT 0022 Final Exam
Practice

56. Find the slope of the line.



- A. $\frac{3}{2}$
- B. -2
- C. 0
- D. Undefined

Answer: D

57. Use the power rule and the power of a product or quotient rule to simplify the expression.

$$(pq)^7$$

$(pq)^7 = \square$ (Type your answer using exponential notation.)

Answer: p^7q^7

58. Solve the equation and check the solution.

$$3(2z - 1) - 2(z + 6) = 2(z + 1)$$

The solution is $z = \square$. (Type an integer or a simplified fraction.)

Answer: $\frac{17}{2}$

Student: _____
Date: _____
Time: _____

Instructor: Kim Ziegler
Course: ZIEGLER CRN 26885 MAT
0022C DEVELOPMENTAL MATH
COMBINED 201520
Book: Jordan: Integrated Arithmetic &
Basic Algebra, 5e

Assignment: MAT 0022 Final Exam
Practice

59. Write the solution set and graph.

$$\frac{x}{2} + 1 \leq \frac{5}{2}$$

The solution set is $\{x \mid x \leq \square\}$.

(Simplify your answer. Type an integer or a fraction.)

Which of the following graphs represents the solution set?

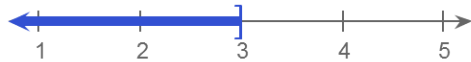
A.



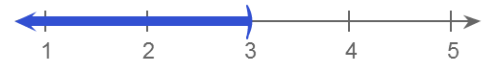
B.



C.



D.



Answers 3

C

60. Simplify the expression.

$$\frac{(p^3)^2(-p^2)^4}{(p^5)^6}$$

$$\frac{(p^3)^2(-p^2)^4}{(p^5)^6} = \square$$

(Simplify your answer. Use integers or fractions for any numbers in the expression. Use positive exponents only.)

Answer: $\frac{1}{p^{16}}$

Student: _____
Date: _____
Time: _____

Instructor: Kim Ziegler
Course: ZIEGLER CRN 26885 MAT
0022C DEVELOPMENTAL MATH
COMBINED 201520
Book: Jordan: Integrated Arithmetic &
Basic Algebra, 5e

Assignment: MAT 0022 Final Exam
Practice

61. Factor the trinomial.

$$r^2 + 3rz - 28z^2$$

Select the correct choice below and fill in any answer boxes within your choice.

- A. The answer is .
- B. The polynomial is prime.

Answer: A, $(r - 4z)(r + 7z)$

62. Translate the sentence to an equation and solve.

$\frac{5}{6}$ of a number s is equal to 20.

Choose the correct equation.

- A. $\frac{5}{6}s = 20$
- B. $\frac{5}{6} + s = 20$
- C. $\frac{5}{6} = 20s$
- D. $\frac{5}{6} = 20 + s$

The solution is $s = \text{}$.

Answers A

24

63. Gwen earns \$580 per week and has 24% of this amount withheld for taxes, Social Security, and Medicare. Find the amount withheld.

The amount withheld is \$.

(Type a whole number or a decimal.)

Answer: 139.20

Student: _____
Date: _____
Time: _____

Instructor: Kim Ziegler
Course: ZIEGLER CRN 26885 MAT
0022C DEVELOPMENTAL MATH
COMBINED 201520
Book: Jordan: Integrated Arithmetic &
Basic Algebra, 5e

Assignment: MAT 0022 Final Exam
Practice

64. Solve the inequality and write the solution set. Then graph the solution set.

$$8 - u > 12 + u$$

Choose the solution set.

A. $\{u \mid u < -2\}$

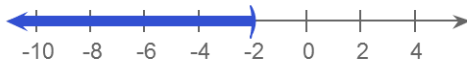
B. $\{u \mid u < -4\}$

C. $\{u \mid u \geq -2\}$

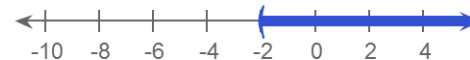
D. $\{u \mid u > -2\}$

Choose the correct graph of the solution set.

A.



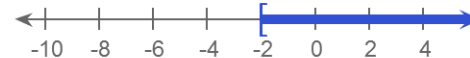
B.



C.



D.



Answers A

A

65. Multiply.

$$(5v + 6)(5v - 6)$$

$$(5v + 6)(5v - 6) = \square \text{ (Simplify your answer.)}$$

Answer: $25v^2 - 36$

66. Evaluate the following.

$$\frac{(-7)(-5) - [5(-4) + 9^2]}{(-5)^2(2) - 9}$$

$$\frac{(-7)(-5) - [5(-4) + 9^2]}{(-5)^2(2) - 9} = \square$$

(Type an integer or a simplified fraction.)

Answer: $-\frac{26}{41}$

Student: _____
Date: _____
Time: _____

Instructor: Kim Ziegler
Course: ZIEGLER CRN 26885 MAT
0022C DEVELOPMENTAL MATH
COMBINED 201520
Book: Jordan: Integrated Arithmetic &
Basic Algebra, 5e

Assignment: MAT 0022 Final Exam
Practice

67. Find the following quotient of the polynomial and monomial.

$$\frac{12a^8g^9 - 8a^6g^7}{4a^4g}$$

$$\frac{12a^8g^9 - 8a^6g^7}{4a^4g} = \square$$

(Simplify your answer. Type exponential notation with positive exponents. Do not factor.)

Answer: $3a^4g^8 - 2a^2g^6$

68. Solve.


A ballplayer made 563 field goals of 902 attempts. What percent of his field goal attempts did he make?

The ballplayer made \square % of his field goal attempts.

(Round to the nearest tenth.)

Answer: 62.4

69. Find the perimeter of the square.



35.3 mm on a side

The perimeter is \square mm^3 .
 mm .
 mm^2 .

(Type a whole number or a decimal.)

Answers 141.2

mm.

Student: _____
Date: _____
Time: _____

Instructor: Kim Ziegler
Course: ZIEGLER CRN 26885 MAT
0022C DEVELOPMENTAL MATH
COMBINED 201520
Book: Jordan: Integrated Arithmetic &
Basic Algebra, 5e

Assignment: MAT 0022 Final Exam
Practice

70. Simplify the expression.

$$(3c^2d^3)^3 + (-4cd^8)(7c^5d)$$

$$(3c^2d^3)^3 + (-4cd^8)(7c^5d) = \square$$

(Simplify your answer. Type exponential notation with positive exponents.)

Answer: $-1c^6d^9$

71. Solve.

$$6 - 4x = 7x - 9x - 6$$

$$x = \square$$

Answer: 6

72. Factor completely.

$$3v^2 - 4v - 15$$

Select the correct choice below and fill in any answer boxes within your choice.

A. $3v^2 - 4v - 15 = \square$

B. The expression is prime.

Answer: A, $(3v + 5)(v - 3)$

73. Jim drove 78 miles in 2 hours. If he can keep the same pace, how long will it take him to drive 1,014 miles?

A. 156 hours

B. 26 hours

C. 52 hours

D. 36 hours

Answer: B

Student: _____
Date: _____
Time: _____

Instructor: Kim Ziegler
Course: ZIEGLER CRN 26885 MAT
0022C DEVELOPMENTAL MATH
COMBINED 201520
Book: Jordan: Integrated Arithmetic &
Basic Algebra, 5e

Assignment: MAT 0022 Final Exam
Practice

74. Solve the following formula for t.

$$G = W + Wrt$$

$$t = \boxed{} \text{ (Simplify your answer.)}$$

Answer: $\frac{G - W}{Wr}$

75. Multiply.

$$(2x + 8)(x - 9)$$

-
- A. $x^2 - 10x - 11$
 B. $x^2 - 72x - 10$
 C. $2x^2 - 11x - 72$
 D. $2x^2 - 10x - 72$

Answer: D

76. Simplify.

$$(x^4)^{-5}$$

$$(x^4)^{-5} = \boxed{} \text{ (Simplify your answer. Use positive exponents only.)}$$

Answer: $\frac{1}{x^{20}}$

77. Solve the following equation.

$$5x + 2 = 3(x + 2)$$

The solution is $x = \boxed{}$. (Simplify your answer.)

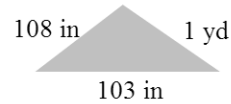
Answer: 2

Student: _____
Date: _____
Time: _____

Instructor: Kim Ziegler
Course: ZIEGLER CRN 26885 MAT
0022C DEVELOPMENTAL MATH
COMBINED 201520
Book: Jordan: Integrated Arithmetic &
Basic Algebra, 5e

Assignment: MAT 0022 Final Exam
Practice

78. Find the perimeter of the triangle.



What is the perimeter? in

Answer: 247

79. Solve the inequality and write the solution set. Then graph the solution set.

$$\frac{1}{2}(u + 2) \leq \frac{1}{4}(u - 7)$$

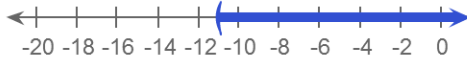
Write the solution set.

$$\{u \mid u \leq \square\}$$

(Simplify your answer. Type an integer or a fraction.)

Choose the correct graph of the solution set.

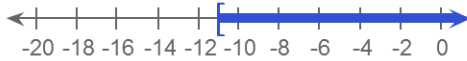
A.



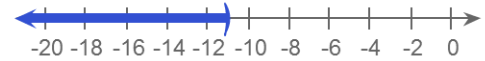
B.



C.



D.



Answers - 11

B

80. Solve for the indicated variable.

$$z = 5 + y, \text{ for } y$$

The solution is $y = \square$.

Answer: $z - 5$